







**(Use MATHEMATICS H W Note Book to ANSWER)**



**I) Count and add the numbers:**



**1x5=5**

 +  =

 +  =

 +  =

 +  =

 +  =

**II) Fill in the blanks:**

**1x5=5**

- 1) When we put together 2 or more numbers it is called \_\_\_\_\_.
- 2) When you add 1 to a number, the answer is the number that comes \_\_\_\_\_.
- 3)  $3 + 4 =$  \_\_\_\_\_.
- 4)  $2 + 4 =$  \_\_\_\_\_ +  $2 = 6$
- 5)  $6 + 1 =$  \_\_\_\_\_.

**III) Answer the following:**

**1x6=6**

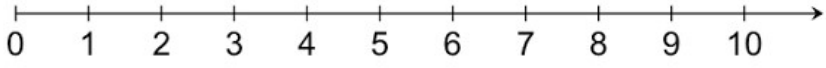
- |                    |                    |
|--------------------|--------------------|
| a) $4 + 5 =$ _____ | b) $5 + 0 =$ _____ |
| c) $2 + 1 =$ _____ | d) $3 + 4 =$ _____ |
| e) $5 + 5 =$ _____ | f) $2 + 0 =$ _____ |

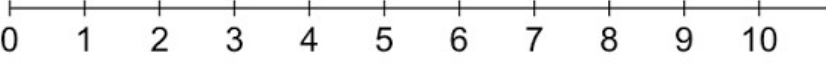
**IV) Solve the following:**


**P**

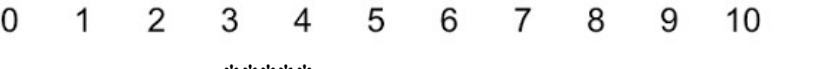
**1x4=4**

1) Add using number strip

a)  $5 + 2 =$  \_\_\_\_\_ 

b)  $8 + 1 =$  \_\_\_\_\_ 

c)  $4 + 4 =$  \_\_\_\_\_ 

d)  $6 + 0 =$  \_\_\_\_\_ 

\*\*\*\*\*

**SEND THE PHOTO or PDF of this ANSWER SHEET to**

**VEENA L S Madam on 9916547659**