

**KHANNUR VIDYANIKETHAN PRE-PRIMARY SCHOOL,
RANEBENNUR**

MID TERM EXAMINATION OCTOBER 2020

Grade – UKG

Subject – MATHEMATICS

Marks – 40

(USE MATHS HW NOTEBOOK TO ANSWER)

I) Write number names one 1 to twenty 20: 1X10=10

II) Write forward numbers 21 to 50: 5x3=15

III) Write before, between, after, numbers: 1/2x4=2

1. ----- 30

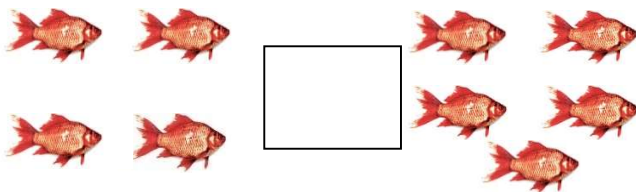
2. 39 ----- 41

3. 15 -----


4. 22-----

IV) Write Greater than and Less than: 1x2=2

1.



2.




V) Write backward numbers 20 to 1: 2x2=4

V) Count and write:

$1/2 \times 4 = 2$

1.



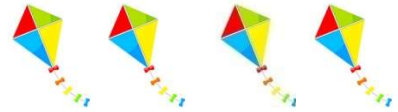
2.



3.



4.

VI) Write the table $4 \times 1 = 4$:

$1 \times 5 = 5$

**SUBMIT THIS ANSWER NOTE BOOK TO GRADE
BUILDING ON THE LAST DAY OF YOUR MID TERM EXAM**